

4.3

Graphing Proportional Relationships

Today's Learning Goals:

- Write and graph proportional relationships.

Reviewing and Expanding

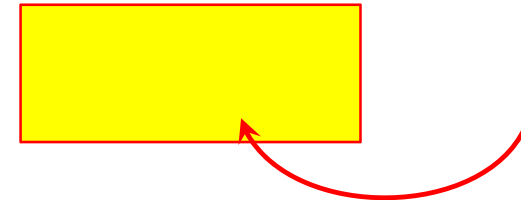
Write an equation for the function

1)	x	y	2)	x	y	3)	x	y
	3	6		7	11		7	35
	4	8		10	14		8	40
	5	10		13	17		9	45
	6	12		16	20		10	50

4)	x	y	5)	x	y	6)	x	y
	8	6		8	6		4	16
	12	8		11	9		6	24
	16	10		14	12		8	32
	20	12		17	15		10	40

Direct Variation (Proportional Relationship)

A direct variation or **proportional relationship** is a relationship between two quantities. There is a clear number being multiplied to **x** to get **y**.




- The constant of proportionality on a graph is also known as the _____ .
- The graph of proportional relationship is always positive and always goes through the origin.

Exploring

Let's say you go to Jack in the Box. You get 1 burger for every 2 dollars dollar.

- 1) Make a T-chart of this relationship if x represents the number of burgers and y represents the cost.



- 2) Make a line graph of this with at least three points and make sure to label the graph.

- 3) Look at your T-chart, what did you have to multiply to the x values to get a y value.
- 4) Write an equation showing this relationship.

Direct Variation By Finding "k"

Tell whether x and y show direct variation. Explain your reasoning.

a.

x	1	2	3	4
y	-2	0	2	4

b.

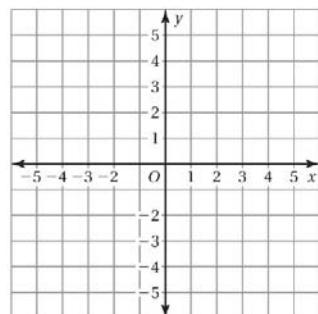
x	0	2	4	6
y	0	2	4	6

Direct Variation Using a Graph

Tell whether x and y show direct variation. Explain your reasoning.

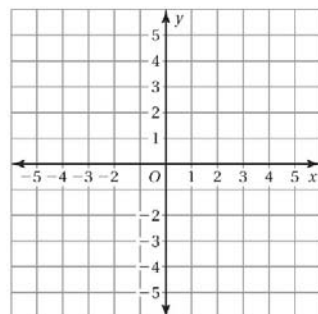
a.

x	1	2	3	4
y	-2	0	2	4



b.

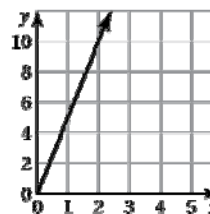
x	0	2	4	6
y	0	2	4	6



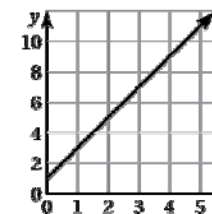
Practice

Tell whether x and y are in a proportional relationship. Explain your reasoning. If so, write an equation that represents the relationship.

1)



2)



Practice

Tell whether x and y are in a proportional relationship. Explain your reasoning. If so, write an equation that represents the relationship.

3)

x	1	3	6	8
y	3	6	8	11

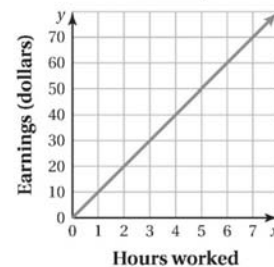
4)

x	4	8	12	16
y	2	4	6	8

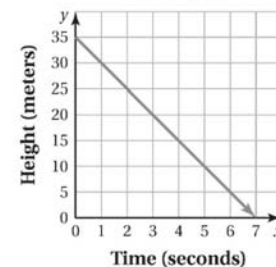
On Your Own

Work with a partner. Tell whether x and y are in a proportional relationship. Explain your reasoning.

a. Money



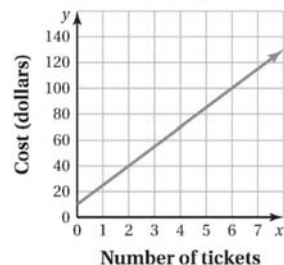
b. Helicopter



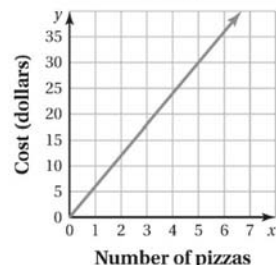
On Your Own

Work with a partner. Tell whether x and y are in a proportional relationship. Explain your reasoning.

c. Tickets



d. Pizzas



On Your Own

Work with a partner. Tell whether x and y are in a proportional relationship. Explain your reasoning.

e.

Laps, x	1	2	3	4
Time (seconds), y	90	200	325	480


f.

Cups of Sugar, x	$\frac{1}{2}$	1	$1\frac{1}{2}$	2
Cups of Flour, y	1	2	3	4

Application

The cost y (in dollars) for x gigabytes of data on an Internet plan is represented by $y = 10x$. Graph the equation and interpret the slope.

- 1) Make a T-chart of this relationship if x represents the number of gigabytes and y represents the cost.



- 2) Make a line graph of this with at least three points and make sure to label the graph.

- 3) What is k ? 4) What is the slope? 5) What does the slope mean?

Practice

The cost y (in dollars) to rent a lane at the bowling alley is proportional to the number x of hours that you rent the lane. It costs \$18 to rent the lane for 2 hours.

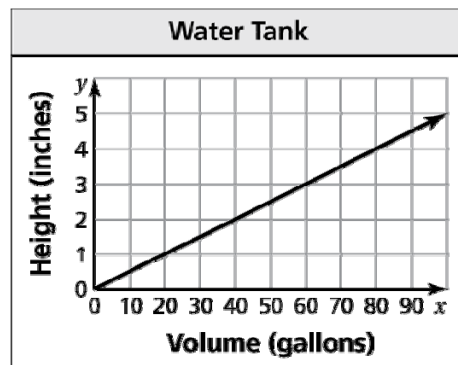
- a. Write an equation that represents the situation.
- b. Interpret the slope.
- c. How much does it cost to rent the lane for 3 hours?

Practice

The graph relates the height of the water in a tank y (in inches) to the volume of the water x (in gallons).

- a. Is the relationship proportional? Explain.

- b. Write an equation of the line. Interpret the slope.



- c. What is the height of the water in the tank when the volume is 250 gallons?