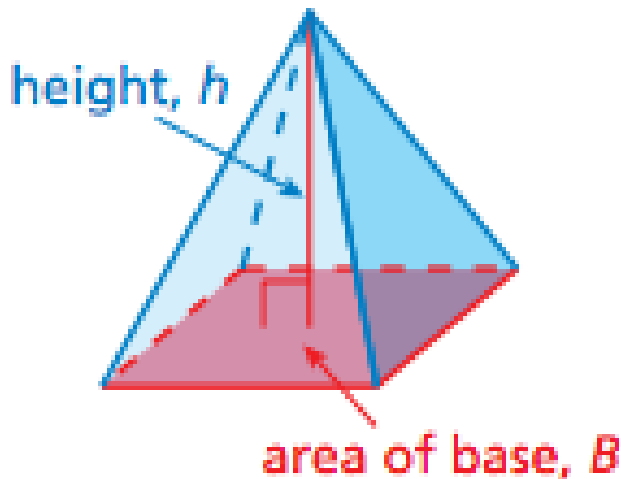


9.5

VOLUME OF PYRAMIDS

Volume of Pyramids

Volume of a Pyramid: _____ the _____ of the area of the _____ and the _____ of the Pyramid.



$$V = \frac{1}{3}BH$$

Area of base

Height of pyramid

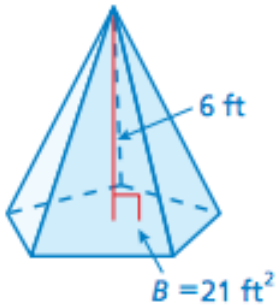
Finding the Volume of Pyramids

Find the volume of the pyramids.

1)



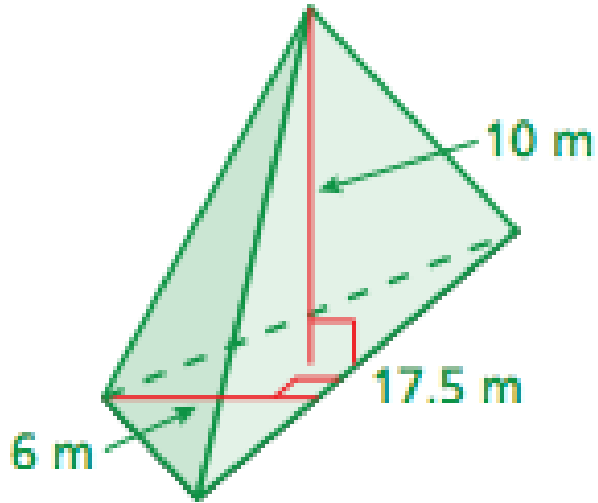
2)



Finding the Volume of Pyramids

Find the volume of the pyramids.

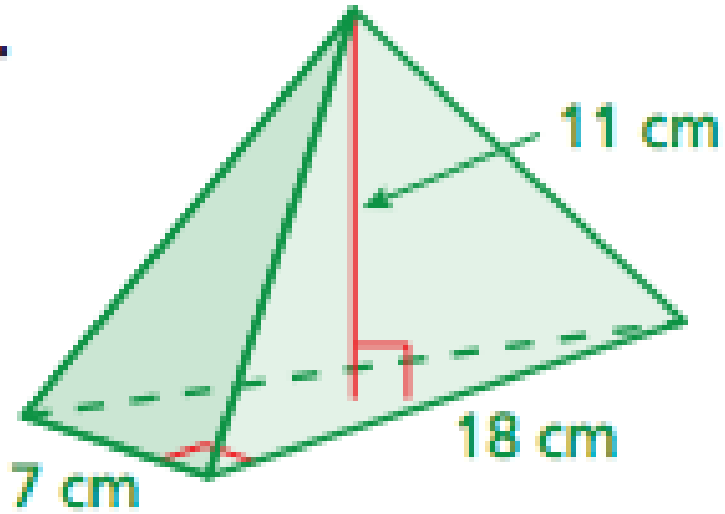
3)



Finding the Volume of Pyramids

Find the volume of the pyramids.

4)



Real-Life Applications

Which bottle of sunscreen holds more volume? Which is the better buy?

