

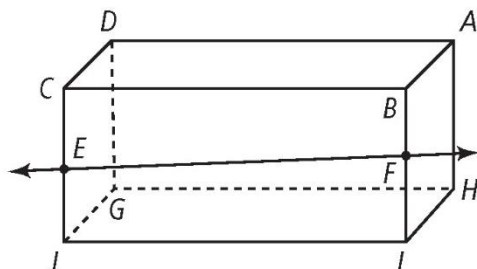
Name \_\_\_\_\_

Date \_\_\_\_\_

# Semester 1 – Final Review

## Part 1 – Multiple Choice

Use the following figure for #1-3.



1) Which of the following planes intersect?

- A) planes  $ADC$  and  $GHI$
- B) planes  $ABC$  and  $ABI$
- C) planes  $CBF$  and  $ADG$
- D) planes  $CBI$  and  $DAH$
- E) None of the above

2) Which of the following planes is parallel to the plane that contains  $\overline{EF}$ ?

- F) Plane  $AGH$
- G) Plane  $BDF$
- H) Plane  $ADE$
- J) Plane  $CBH$
- K) None of the above

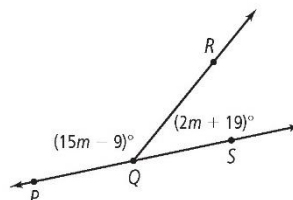
3) How many planes that are shown are perpendicular to the front face of the rectangular prism?

- A) 0
- B) 1
- C) 4
- D) 5
- E) None of the above

4) What is the next number in the sequence?  
8, -3, 5, -6, 2, -9, ...

- F) 90
- G) 29
- H) 6
- J) 3
- K) None of the above

5) What is the measure of  $m$ ?



- A) 10
- B) 39
- C) 141
- D) 180
- E) None of the above

Use the following conditional for #6 & 7

“If an animal has wings, then the animal can fly?”

6) What is the conclusion of the conditional?

- F) An animal has wings.
- G) The conditional is talking about birds.
- H) The animal can fly.
- J) Animals with wings can fly.
- K) None of the above

7) Which is a counterexample for the conditional?

- A) parrots
- B) penguins
- C) hummingbirds
- D) bats
- E) None of the above

- 8) What is the sum of the measures of the exterior angles of an equilateral triangle?

F)  $90^\circ$       G)  $180^\circ$   
 H)  $360^\circ$       J)  $900^\circ$   
 K) None of the above

- 9) What is the slope of a line parallel to  $-8x + y = 2$ ?

A) 8      B)  $\frac{8}{-1}$   
 C)  $\frac{-1}{8}$       D)  $\frac{1}{8}$   
 E) None of the above

- 10) Given  $\triangle ABC$  with  $m\angle B = (3x + 10)$  and  $m\angle A = x$ , if  $m\angle C$  is the right angle, what is the value of  $x$ ?

F)  $90^\circ$       G)  $75^\circ$   
 H)  $45^\circ$       J)  $20^\circ$   
 K) None of the above

- 11) Given that  $m\angle 2 = 50^\circ$ , which postulate or theorem proves that  $m\angle 2 = 50^\circ$ ?

A) Alternate Interior Angles Theorem  
 B) Corresponding Angles Postulate  
 C) Parallel Postulate  
 D) Same-Side Interior Angles Theorem  
 E) None of the above

- 12) A segment has a midpoint  $(-2, 9)$  and one endpoint  $(2, 8)$ . What is the coordinate of the other endpoint?

F)  $(-6, 10)$       G)  $(-4, 10)$   
 H)  $(-2, 0.5)$       J)  $(0, 8.5)$   
 K) None of the above

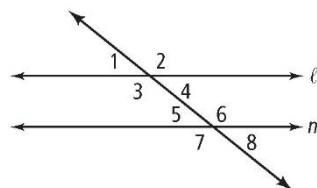
- 13) Given  $\triangle ABC$  with  $m\angle B = (3x + 10)$  and  $m\angle A = x$ , if  $m\angle C$  is the right angle, what is the value of  $x$ ?

A)  $90^\circ$       B)  $75^\circ$   
 C)  $45^\circ$       D)  $20^\circ$   
 E) None of the above

- 14) If Joe turns off his alarm, then he sleeps too late. If Joe sleeps too late, then he misses his bus. Joe catches the bus. What can you conclude?

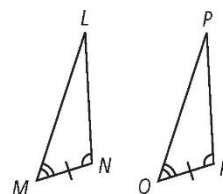
F) Joe slept too late.  
 G) Joe's mom woke him up.  
 H) Joe did not turn off his alarm.  
 J) Joe set his alarm for the correct time.  
 K) None of the above

- 15) Which best describes  $\angle 1$  and  $\angle 5$ ?



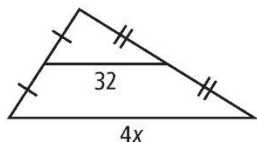
A) alternate interior angles  
 B) alternate exterior angles  
 C) corresponding angles  
 D) same-side exterior angles  
 E) None of the above

- 16) Which postulate can be used to justify stating that  $\triangle LMN \cong \triangle PQR$ ?



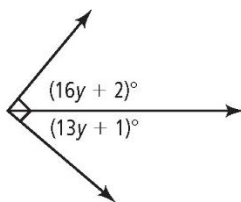
F) ASA      G) SAS  
 H) SSS      J) AAS  
 K) None of the above

- 17) What is the value of  $x$  in the diagram at the right?



- A) 4                  B) 8  
C) 16                D) 32  
E) None of the above
- 18) Which side lengths would not make a triangle?
- F) 3, 4, 5            G) 3, 6, 2  
H) 8, 8, 8            J) 10, 25, 30  
K) None of the above

- 19) What is the value of  $y$ ?



- A) 90                  B) 29  
C) 6                    D) 3  
E) None of the above
- 20) The shadow of a fire hydrant is 5 ft. long. At the same time of day, the shadow of a nearby tree is 2 ft. less than 6 times as long as the shadow of the fire hydrant. If the fire hydrant is 2 ft. tall, how tall is the tree?
- F) 11.2 ft.              G) 12.8 ft.  
H) 35 ft.                J) 47.5 ft.  
K) None of the above

- 21) Which is not a point of concurrency in a triangle?

A) incenter      B) orthocenter  
C) altitude      D) centroid  
E) None of the above

- 22) Which line is perpendicular to  $3x + 5y = 2$ ?

F)  $5x - 3y = -3$       G)  $3x - 5y = -3$   
H)  $x - 3y = 3$         J)  $3x + 5y = -3$   
K) None of the above

- 23) What is the inverse of the statement, "If the sky is blue, then it is not raining"?

A) If the sky is not blue, then it is raining.  
B) If it is not raining, then the sky is blue.  
C) If it is raining, then the sky is not blue.  
D) If the sky is blue, then it is raining.  
E) None of the above

- 24) Which conditions are sufficient to prove a quadrilateral is a square?

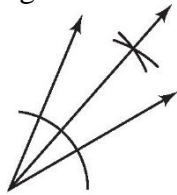
**I.** All four sides are congruent.  
**II.** The diagonals are congruent.  
**III.** The diagonals bisect each other.

F) I only              G) I and II  
H) I and III          J) II and III  
K) None of the above

- 25) Which of the following never contains an angle with a measure of  $90^\circ$ ?

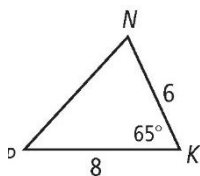
A) a right triangle  
B) an isosceles triangle  
C) an equilateral triangle  
D) a trapezoid  
E) None of the above

- 26) What type of construction is shown at the right?



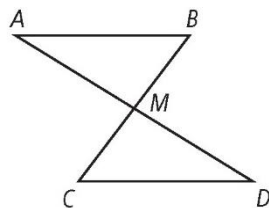
- F) angle bisector  
G) perpendicular bisector  
H) congruent angles  
J) congruent segments  
K) None of the above

- 27) What can you conclude from the diagram?



- A)  $m\angle P < m\angle N$       B)  $m\angle N < 65$   
C)  $m\angle P > 65$       D)  $NK < NP$   
E) None of the above

- 28) If it is given that  $M$  is the midpoint of  $AD$ , what additional information do you need to prove  $\triangle AMB \cong \triangle DMC$ ?

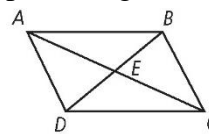


- F)  $\overline{AB} \parallel \overline{CD}$       G)  $\overline{AM} \cong \overline{DM}$   
H)  $\angle A \cong \angle C$       J)  $\angle B \cong \angle D$   
K) None of the above

- 29) Which of the following cannot be true of the median of a triangle?

- A) It bisects the opposite side.  
B) It does not bisect the opposite side.  
C) It is perpendicular to the opposite side.  
D) It is not perpendicular to the opposite side.  
E) None of the above

- 30) If it is given that  $\overline{AC}$  bisects  $\overline{BD}$ , what additional information do you need to prove that quadrilateral  $ABCD$  is a parallelogram?



- F)  $\overline{AC} \perp \overline{BD}$       G)  $\overline{BC} \perp \overline{DC}$   
H)  $\overline{BD}$  bisects  $\overline{AC}$       J)  $\overline{BE} \cong \overline{DE}$   
K) None of the above

- 31) A woman has a piece of wood that is 22 ft long and another that is 13 ft long. She wants to select another piece of wood so that she can put all the pieces together to make a triangular garden bed. How long could the third piece of wood be?

- A) 8 ft.      B) 8 ft 6 in.  
C) 12 ft.      D) 36 ft.  
E) None of the above

- 32) The lengths of the sides of a triangle are in the extended ratio 3 : 7 : 9. The triangle's perimeter is 228 m. What are the lengths of the sides?

- F) 30, 70, and 90 m  
G) 36, 84, and 108 m  
H) 33, 77, and 107 m  
J) 37, 84, and 111 m  
K) None of the above

