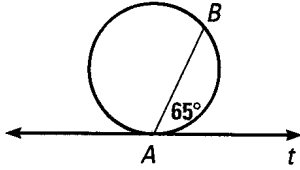


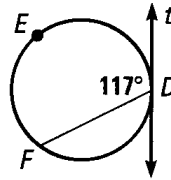
# 7.4 – Arcs and Angles (Cont.)

If  $t$  is the tangent to the circle, find the missing value.

1)  $m\widehat{AB}$

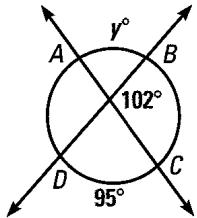


2)  $m\widehat{DEF}$

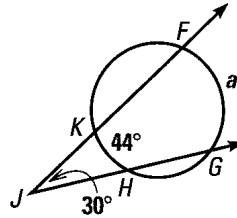


Find the missing degree value.

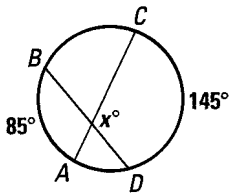
3)



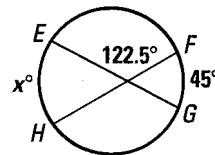
4)



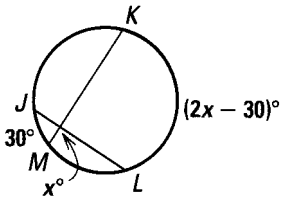
5)



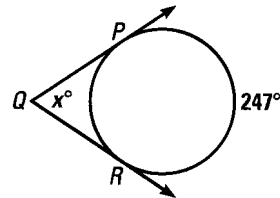
6)



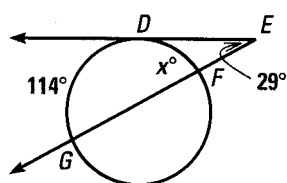
7)



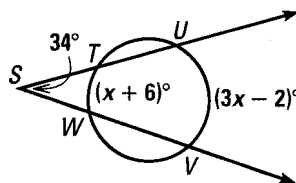
8)



9)



10)



Find the missing length value.

