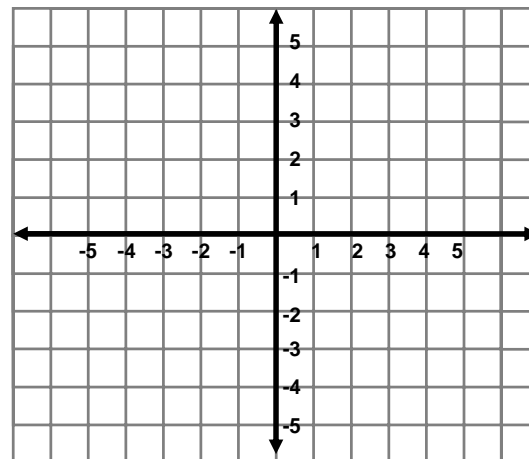


10.8

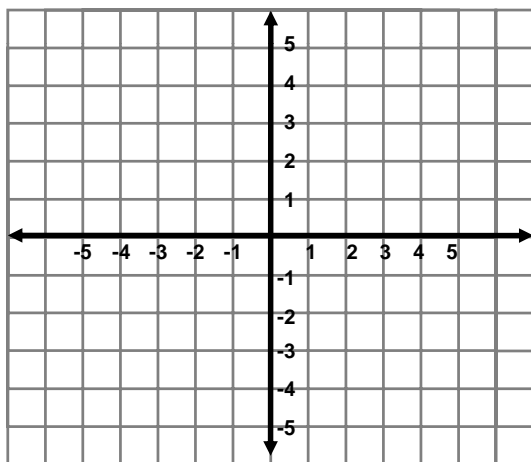
Systems of Linear Equations

Graphing Linear Inequalities



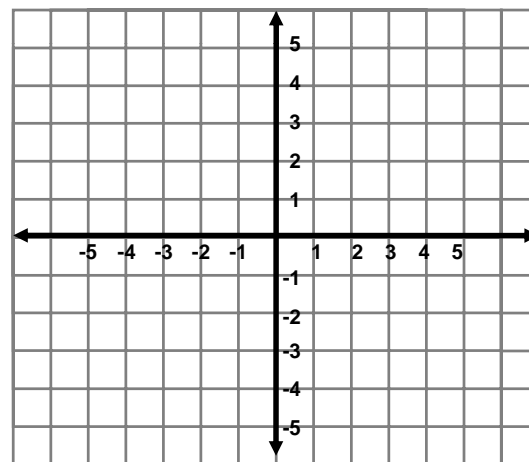
1) $y - x - 3 \leq 0$
 $2x + 3y > -6$

Graphing Linear Inequalities



2) $y > 1$
 $x < 3$

Graphing Linear Inequalities



3) $x - y > 2$
 $x + 2y \geq 1$